


STUDENT WORKSHEET





GENERAL PART

GEOGRAPHY AND ITS IMPLICATIONS:

1. Look at the **map** and paint the borders of the State of Israel as follows:

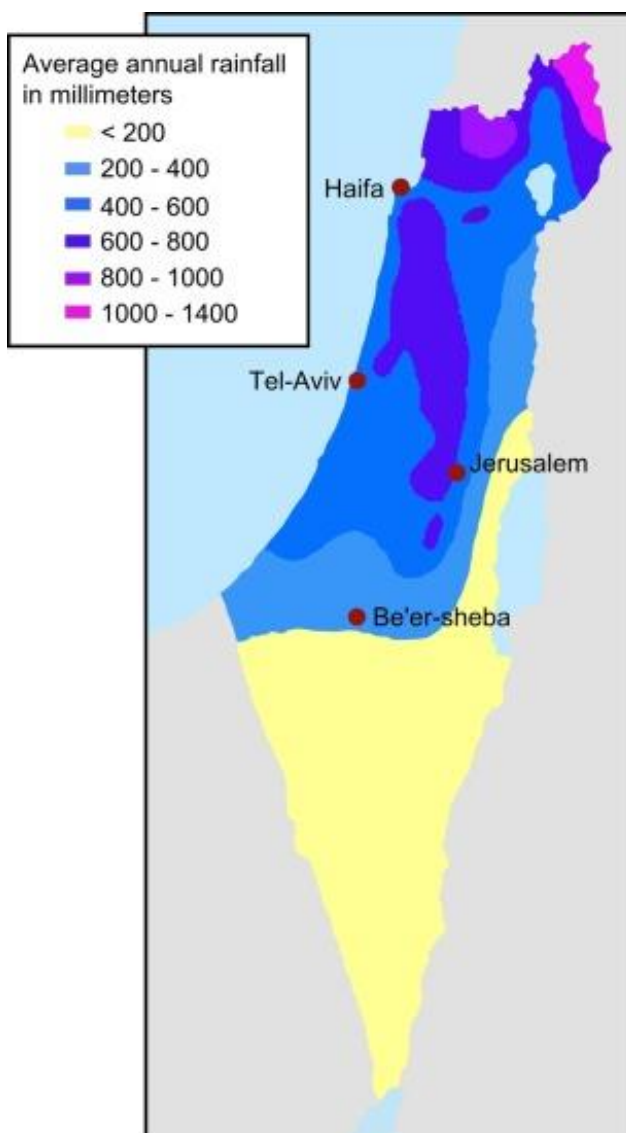
- friendly borders in blue
- hostile borders in red





GENERAL PART


Look at the map below:



2. Identify two of Israel major climate zones. Which are they?

3. What is the average annual rainfall in each one of the two zones that you found?

4. What are the typical temperatures during the summer season in the north and in the south of Israel?



GENERAL PART

ECONOMY:

5. mark your answer - right or wrong

- Israel's economy is mainly centralized, with only a small part of it in private hands. right / wrong
- The high-tech industry is an important component of Israel's economy. right / wrong
- The Israeli currency is the euro. right / wrong
- Citizens of Israel must pay National Insurance. right wrong

6. circle the products typical of the Israeli industry:





GENERAL PART


HOLIDAYS AND TRADITIONS:

7. In Israel, the Jewish holidays are determined according to the Jewish calendar calculated according to:

- A. Moon cycle
- B. Solar cycle

8. The usual weekly rest day in Israel is?

- A. Sunday
- B. Friday
- C. Saturday



GENERAL PART

LAW:

9. By law, Marriages and divorces in Israel are managed by?

- A. Magistrates Court judge
- B. A representative of the municipality
- C. **a person authorized by the state**

10. What are the official languages by law in the State of Israel:


Include the correct answer (s)

English Russian Hebrew French Arabic Aramaic Spanish

EDUCATION:

11. Does Israel have a Compulsory Education Law?

- A. Only for boys
- B. Until the completion of primary school
- C. For everyone from 5 to 18 years old



GENERAL PART

JEWISH RELIGION:


12. According to Jewish religious dietary laws, which foods are forbidden: circle the correct answer (s)

Shrimp; Bacon; Humus; Hamburger with cheese; Grilled Chicken;
Cheese; Vegetable Salad

SPORT:

13. What is the most popular sport in Israel?






GENERAL PART

THE POLICY OF ENCOURAGING BIRTH RATES:

14. Israel is known as a country that encourages birth. How does the state express this approach? give two examples of policies that support birth promotion.
15. Arrange the following groups according to their fertility level from high to low
- Jews
 - Muslims
 - Druze
16. Surprisingly, despite the policy of encouraging birth rates, in Israel, pregnancy terminations are legal. What is required of women who want to terminate a pregnancy?



GENERAL PART

THE MULTICULTURAL STRUCTURE IN ISRAEL:

Israel is divided into two main groups. 20 % are Arabs, and 80 % are Jews.

17. Which subgroups are included in the Arab group?

18. From which major countries do members of the Jewish group come from?

19. Specify two differences between the two groups (Arabs & Jews).